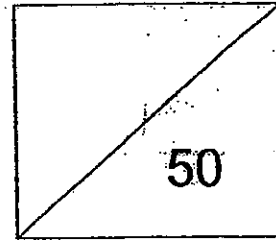


Henry Park Primary School

End Year Review

Mathematics

Primary One



Name: _____ ()

Class: P 1 _____ Parent's signature: _____

Section A: MCQ (5 x 2 marks = 10 marks)

Read the questions carefully. Choose the correct answer and write its number in the brackets provided.

1. $32 + 57 =$ _____

(1) 82

(2) 85

(3) 89

(4) 99

()

2. $70 - 26 =$ _____

(1) 44

(2) 46

(3) 54

(4) 56

()

3. Which of the number statements below is correct?

(1) $5 \times 7 = 5 + 5 + 5 + 5 + 5$

(2) $5 \times 1 = 1$


(3) 2 groups of 5 = 2 fives

(4) $6 + 6 + 6 = 6$ sixes

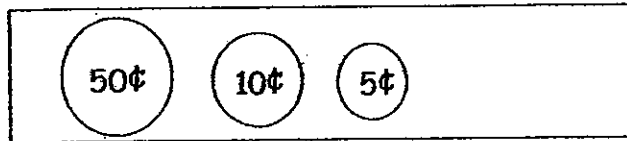
()

4. Which of the boxes below shows the least amount of money?

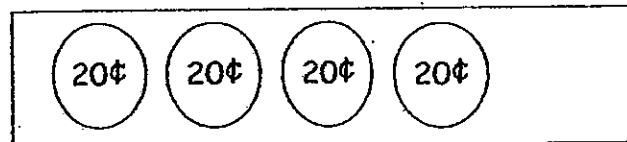
(1)



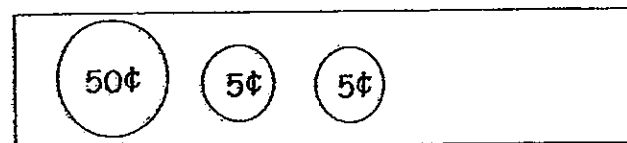
(2)



(3)



(4)



()

5. What is the missing number in the box?

32, 28, 24, ?, 16, 12

(1) 19

(2) 20

(3) 21

(4) 22

()

Section B: Open-ended Questions (14 x 2 marks = 28 marks)

Fill in the correct answers in the spaces provided.

6.



Doggie



Froggy



Kangaroo

3rd



Rabbit


4th



Kitty

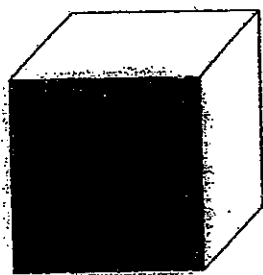
Name the animal that comes before Froggy?

7. Put the carrots into 6 equal groups. Ring to show the groups.

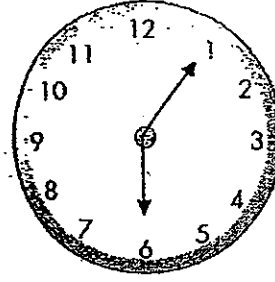
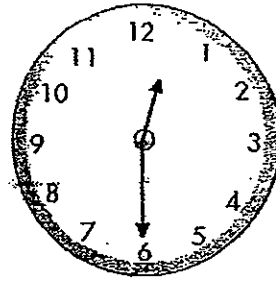
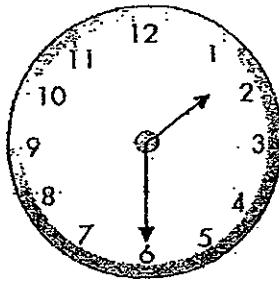


There are carrots in each group.


8. One face of the box is shaded. Name the shape of the shaded part.



9. Cross out the clock which shows 'half past 1'.




10. Study the pictures below. Write down two addition and two subtraction sentences based on the pictures given below.




$$\underline{\quad\quad} + \underline{\quad\quad} = \underline{\quad\quad} \qquad \underline{\quad\quad} - \underline{\quad\quad} = \underline{\quad\quad}$$

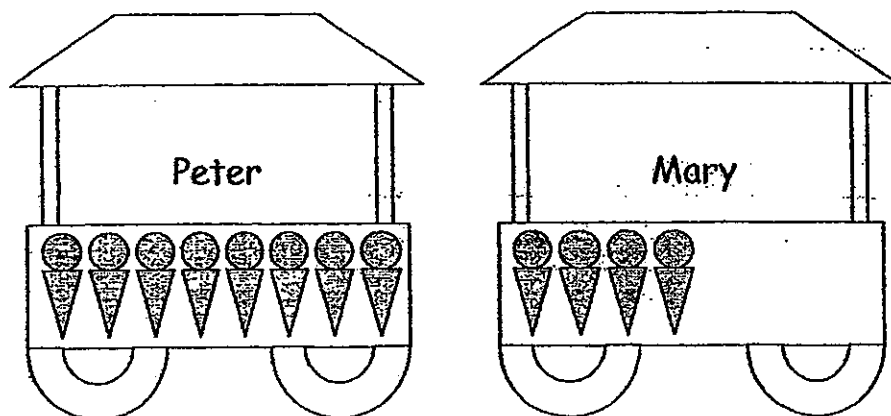
$$\underline{\quad\quad} + \underline{\quad\quad} = \underline{\quad\quad} \qquad \underline{\quad\quad} - \underline{\quad\quad} = \underline{\quad\quad}$$


11. Draw  in the box to show 4 groups of 2.

Ring to show the groups.



12.



How many ice-creams () must Peter give Mary so that they will have the same number of ice-creams?

Peter must give

ice-creams to Mary.

13. Mr Ho has \$25.

He wants to buy the telephone shown below.

How much more money does he need?

Telephone



\$32

\$

14. Look at the table below and fill in the blanks.

Number of Cows	Number of legs
1	4
2	8
4	<input type="text"/>
<input type="text"/>	24

15. Jason has \$8 in his wallet. He bought 3 different items from the fast food restaurant and had \$2 left. Which 3 different items did he buy from the fast food restaurant?



fries
\$2



burger
\$3



pizza
\$7



sandwich
\$4



cake
\$5




milo
\$1

Jason bought the

and

The picture graph below shows the favourite toys of some children. Study the graph and answer questions 16 and 17.



Each ☆ stands for 1 child.

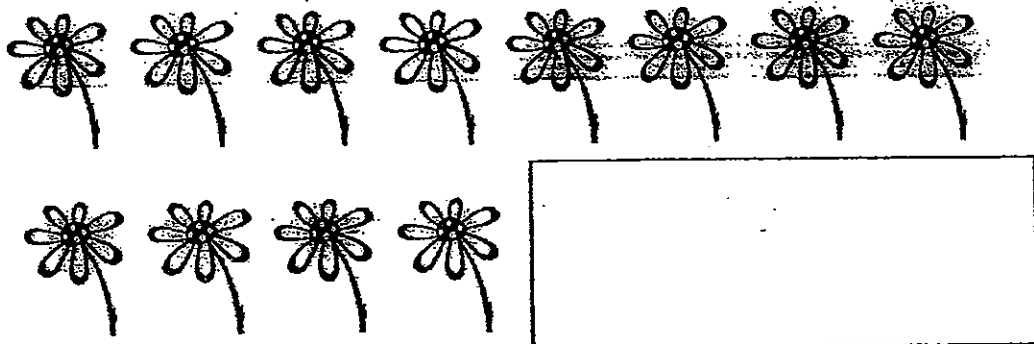
16. The least popular toy is the

17. 2 fewer children like the

than

the soft toy.

18. Mrs Wan wants to put 5 flowers into each vase.
Draw in the box to show the additional number of flowers she needs so that each vase will have 5 flowers.




19. Read the given statements. Label the crayons (A, B, C, D) according to their lengths in the boxes provided.

A is longer than B but shorter than D.

C is longer than D.

B is the shortest crayon.



Section C: Problem Sums (3 × 4 marks = 12 marks)

Do these sums carefully. Write your number sentences and show your workings clearly.

20. Sharon has 25¢ in her purse. She needs another 65¢ to buy a can of orange juice. How much does the can of orange juice cost?

Working





The can of orange juice costs _____¢.

21. Godzilla pushed 73 buildings down. King Kong pushed 45 buildings down. How many more buildings did Godzilla push down than King Kong?

Working


Godzilla pushed down _____ more buildings.

22. There are 28 toy penguins.
Clarissa packed the toy penguins equally into groups of 4.
How many groups of toy penguins does she have?
Ring to show the groups of toy penguins.



She has _____ groups of toy penguins.

***** THE END *****



Answer Ke

EXAM PAPER 2012

SCHOOL : HENRY PARK

SUBJECT : PRIMARY 1 MATHEMATICS

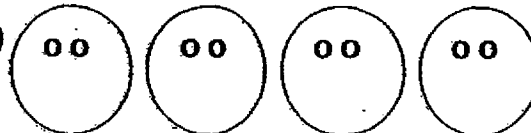
TERM : SA2

Q1	Q2	Q3	Q4	Q5
3	1	3	4	2

6)Doggie 7)3 8)square 9)X O O

10) $6 + 4 = 10$ $10 - 6 = 4$
 $4 + 6 = 10$ $10 - 4 = 6$

11)



12)2 13)\$7 14)Number of Cows = 6 Number of legs = 16

15)Jason bought milo , fries , and burger.

16)toy bus 17)rocking horse

18)Draw three (flowers)


19)B, A, D, C

20) $65c + 25c = 90c$

The can of orange juice costs 90c.

21) $73 - 45 = 28$

Godzilla pushed down 28 more buildings.



She has 7 group of toy penguins.